

## Negative Numbers: Fill in the missing values

From box to box we subtract the same number.

For each question, figure out what number is subtracted. Then fill in the gaps.

Example:

-1,	-6,		-16,		-26,	
-----	-----	--	------	--	------	--

The number being subtracted is 5.

The answers are:

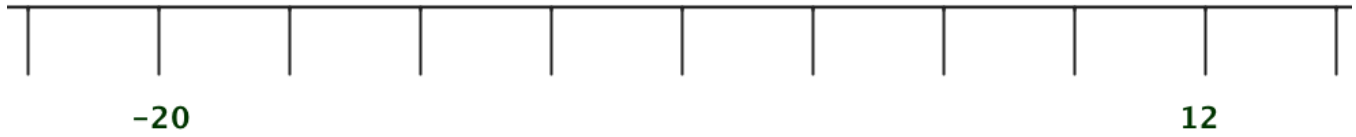
-1,	-6,	-11,	-16,	-21,	-26,	-31,
-----	-----	------	------	------	------	------

1.	9,	5,		-3,		-11,	
2.	-9,	-12,		-18,		-24,	
3.	3,	-1,		-9,		-17,	
4.	16,	10,		-2,		-14,	
5.		0,		-18,		-36,	
6.		11,		1,		-9,	

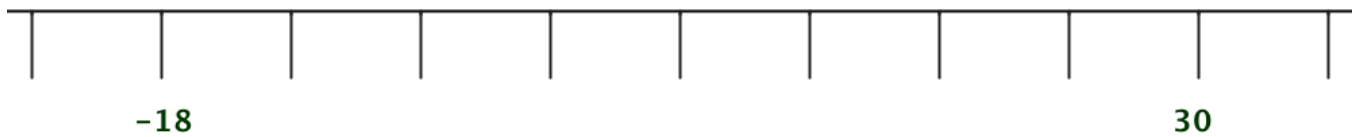
## Number Lines: Fill in the blanks

---

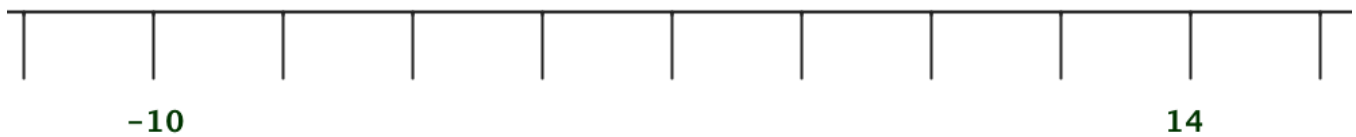
interval = 4



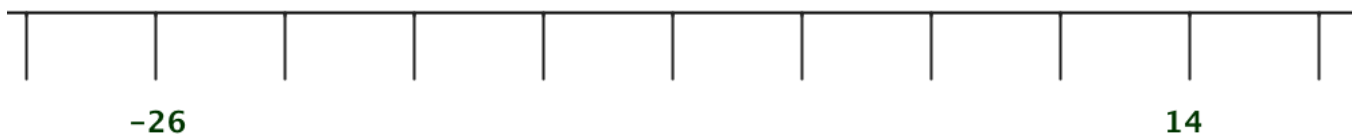
interval = 6



interval = 3



interval = 5



interval = 4

